
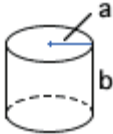
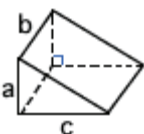

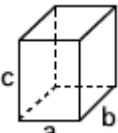
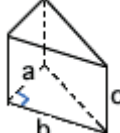
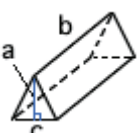
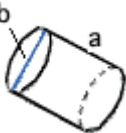
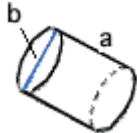

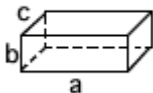



Name _____

Date _____
(Answer ID # 0638723)

Prisms and Cylinders

Find the volume of each solid to the nearest tenth. (use $\pi = 3.14$)

<p>1.</p>  <p>$a = 19$ in $b = 52$ in</p>	<p>2.</p>  <p>$a = 16$ km $b = 55$ km</p>	<p>3.</p>  <p>$a = 8.85$ cm $b = 5$ cm $c = 11$ cm</p>
<p>4.</p>  <p>$a = 6$ m $b = 63$ m</p>	<p>5.</p>  <p>$a = 12$ ft $b = 8$ ft $c = 39$ ft</p>	<p>6.</p>  <p>$a = 3.67$ yd $b = 9$ yd $c = 14$ yd</p>
<p>7.</p>  <p>$a = 6.72$ in $b = 14$ in $c = 14$ in</p>	<p>8.</p>  <p>$a = 20$ yd $b = 57$ yd</p>	<p>9.</p>  <p>$a = 50.2$ cm $b = 57.7$ cm</p>
<p>10.</p>  <p>$a = 10$ m $b = 15$ m</p>	<p>11.</p>  <p>$a = 36$ km $b = 17$ km $c = 13$ km</p>	<p>12.</p>  <p>$a = 45.5$ ft $b = 65.3$ ft</p>